

Fractions

Name: _____

What fraction of each shape is shaded? Circle the correct answer.

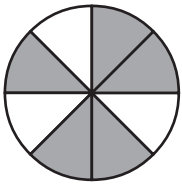


$\frac{6}{9}$

$\frac{3}{8}$

$\frac{5}{8}$

$\frac{3}{5}$

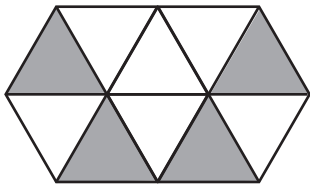


$\frac{5}{8}$

$\frac{3}{5}$

$\frac{3}{8}$

$\frac{5}{9}$

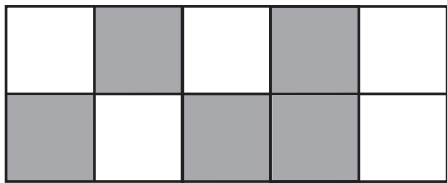


$\frac{4}{9}$

$\frac{6}{10}$

$\frac{4}{6}$

$\frac{4}{10}$

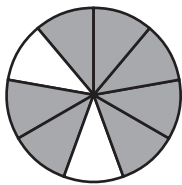


$\frac{5}{8}$

$\frac{5}{10}$

$\frac{7}{12}$

$\frac{5}{9}$

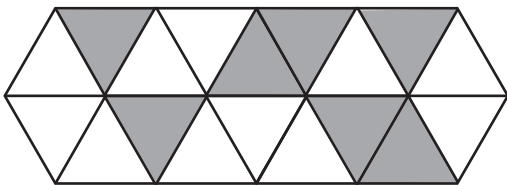


$\frac{2}{7}$

$\frac{7}{10}$

$\frac{7}{9}$

$\frac{2}{9}$

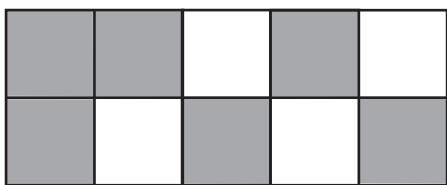


$\frac{9}{18}$

$\frac{7}{11}$

$\frac{11}{18}$

$\frac{7}{18}$



$\frac{6}{10}$

$\frac{4}{6}$

$\frac{4}{10}$

$\frac{6}{18}$