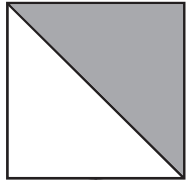


Fractions

Name: _____

What fraction of each shape is shaded? Circle the correct answer.

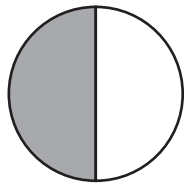


$\frac{1}{3}$

$\frac{3}{4}$

$\frac{1}{2}$

$\frac{2}{5}$

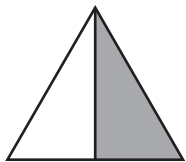


$\frac{1}{2}$

$\frac{3}{5}$

$\frac{1}{4}$

$\frac{1}{3}$

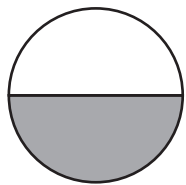


$\frac{1}{4}$

$\frac{1}{2}$

$\frac{2}{5}$

$\frac{2}{3}$




$\frac{1}{3}$

$\frac{3}{4}$

$\frac{3}{4}$

$\frac{1}{2}$

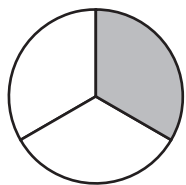


$\frac{1}{2}$

$\frac{2}{5}$

$\frac{1}{3}$

$\frac{2}{3}$




$\frac{1}{4}$

$\frac{3}{4}$

$\frac{1}{3}$

$\frac{3}{5}$



$\frac{2}{4}$

$\frac{1}{4}$

$\frac{3}{4}$

$\frac{4}{6}$